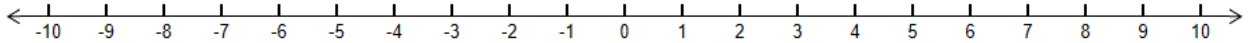


2016 Mathematics Standards of Learning
Algebra Readiness Formative Assessment

6.3c

1. Represent $|4|$ and $|-4|$ on the number line below.



2. What is the absolute value of zero? _____

Why? _____

3. Identify the two true statements below.

$$|6| = -6$$

$$|-8| = 8$$

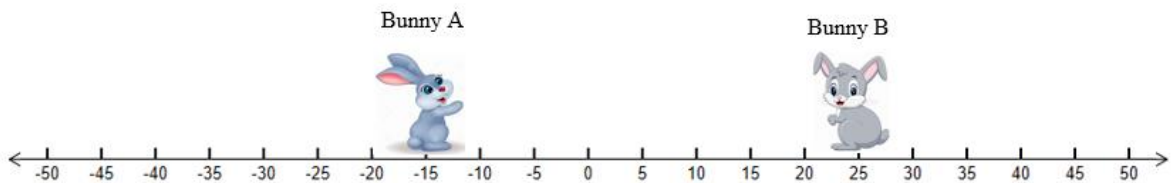
$$-4 = |4|$$

$$|-10| = -10$$

$$|9| = -9$$

$$|52| = 52$$

4. Bunny A and Bunny B are hopping on the number line below. What point should Bunny B hop to in order to have the same absolute value as Bunny A?



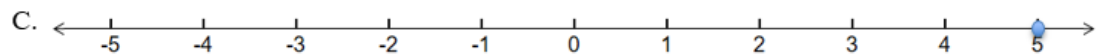
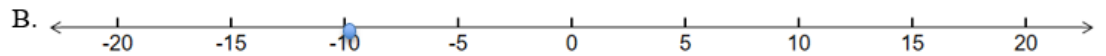
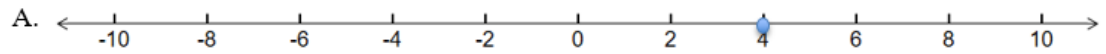
Bunny B should hop to point _____.

2016 Mathematics Standards of Learning
Algebra Readiness Formative Assessment

5. Absolute value is –

- A. the distance from zero.
- B. shown with the symbols $| \quad |$.
- C. never a negative value
- D. all of the above.

6. Which point on the number lines below represents the greatest absolute value?



Virginia Department of Education 2018