

2016 Mathematics Standards of Learning
Algebra Readiness Formative Assessment

8.2

1. Write the following labels in the appropriate box to best represent the subsets of the real number system.

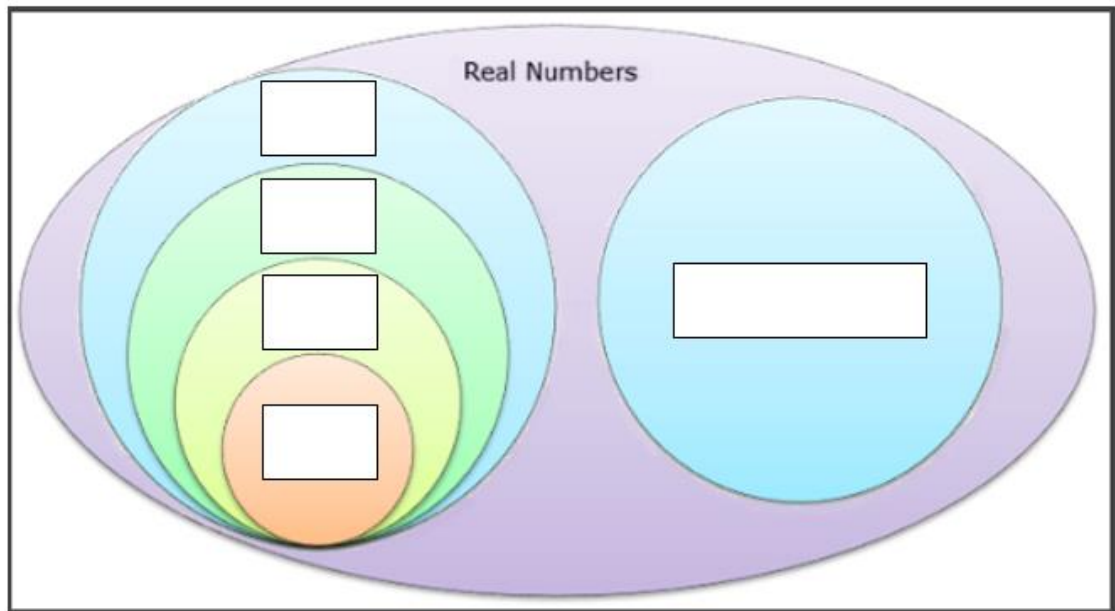
Rational
Numbers

Whole
Numbers

Irrational
Numbers

Natural
Numbers

Integers



2. Fill in the blanks to make a true statement about $0.3\overline{33}$... (choose from the choices below)

This is a(n) since it can be expressed as $\frac{1}{3}$.

repeating decimal

terminating decimal

irrational number

rational number

2016 Mathematics Standards of Learning
Algebra Readiness Formative Assessment

3. Sort the following list of numbers into rational and irrational numbers.

0.21953 $\sqrt{12}$ 0 4.285... $-\sqrt{87}$ $-4\frac{2}{3}$ 9.131313... π

Rational Numbers	Irrational Numbers

4. Write the letter of each definition next to the corresponding subgroup of the real number system.

- ___ Natural Numbers A. the set of whole numbers and their opposites $\{\dots - 2, -1, 0, 1, 2, \dots\}$
- ___ Whole Numbers B. the set of counting numbers and zero $\{0, 1, 2, 3, \dots\}$
- ___ Integers C. the set of all nonrepeating, nonterminating decimals
 $\{\pi, 1.23233, \sqrt{2}\}$
- ___ Rational Numbers D. the set of counting numbers $\{1, 2, 3, 4, \dots\}$
- ___ Irrational Numbers E. the set of all numbers that can be expressed as fraction in form
 $\frac{a}{b}$, where a and b are integers and b does not equal zero
 $\{2.444\bar{4}, 75\%, \frac{3}{7}, \sqrt{49}\}$

2016 Mathematics Standards of Learning
Algebra Readiness Formative Assessment

5. Identify which statement is false.

The product of two rational numbers is rational.

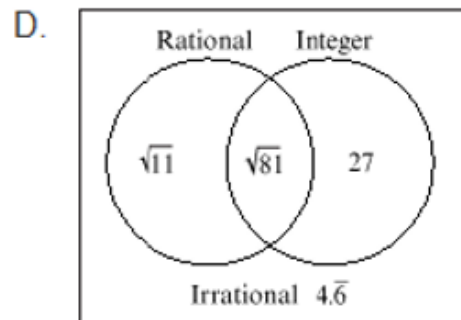
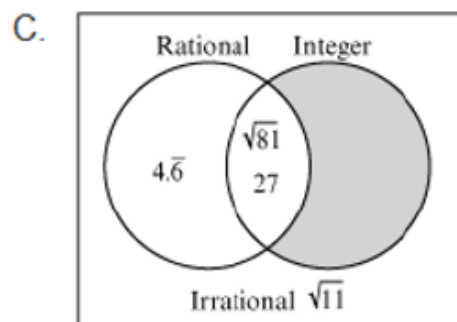
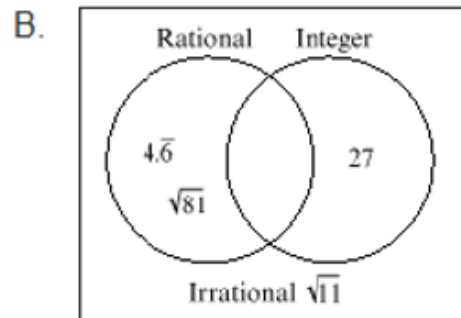
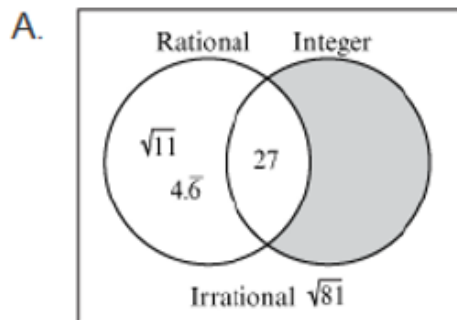
The sum of a rational number and an irrational number is irrational.

The sum of a rational number and an irrational number is rational.

The product of a nonzero rational number and an irrational number is irrational.

6. Which Venn diagram best represents the following sets of numbers?

$\sqrt{81}$, 27 , $4.\bar{6}$, $\sqrt{11}$



2016 Mathematics Standards of Learning
Algebra Readiness Formative Assessment

7. Which of the following can be defined as an integer, but not a whole number?

A. $-\frac{1}{3}$

B. $-\sqrt{20}$

C. $-\frac{20}{5}$

D. -13.1

8. The number 3.7 is best described as –

A. a rational number

B. an integer

C. a whole number

D. an irrational number

9. Which is a true statement concerning the rational number $\frac{2}{3}$?

A. This number can be expressed in the form $\frac{a}{b}$, where a and b are integers and $b \neq 0$.

B. This number cannot be expressed in the form $\frac{a}{b}$, where a and b are integers and $b \neq 0$.

C. This number can be expressed in the form $\frac{a}{b}$, where a and b are integers and $b = 0$.

D. This number cannot be expressed in the form $\frac{a}{b}$, where a and b are integers and $b = 0$.

10. Which of these is a rational number?

A. $\sqrt{2}$

B. $0.414114\dots$

C. $\sqrt{5}$

D. -6.060606